


Year 1 Maths Activity Mat: Autumn 1

①

Section 1

How many strawberries are here?



Section 4

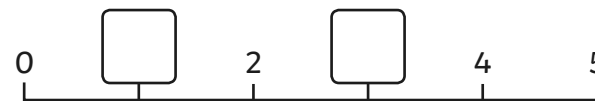
$7-1=$

$5-1=$

$2-1=$

Section 6

Put the missing numbers on the number line.



Section 2

Write the number that is one more.

$4 \rightarrow$ $6 \rightarrow$ $10 \rightarrow$

Section 5


Write a number statement for the picture.



$\square + \square = \square$

Section 7

Tessa has 6 pens. She loses 1 pen.
How many pens does she have left?



Section 3

Write the numbers in the box.

three nine one


Section 8

What's next? Write 3 more numbers in this sequence.



Section 1

How many strawberries are here?



Section 4

$$7-1= \boxed{6}$$

$$5-1= \boxed{4}$$

$$2-1= \boxed{1}$$

Section 6

Put the missing numbers on the number line.



Section 2

Write the number that is one more.

$$4 \rightarrow \boxed{5} \quad 6 \rightarrow \boxed{7} \quad 10 \rightarrow \boxed{11}$$

Section 5


Write a number statement for the picture.



$$\boxed{2} + \boxed{1} = \boxed{3}$$

Section 7

Tessa has 6 pens. She loses 1 pen.
How many pens does she have left?



Section 3

Write the numbers in the box.

three nine one

Section 8

What's next? Write 3 more numbers in
this sequence.




Year 1 Maths Activity Mat: Autumn 1

①

Section 1

How many carrots are here?



Section 4

$10-1=$

$9-1=$

$13-1=$

Section 6

Put the missing numbers on the number line.



Section 2

Write the number that is one more.

12 →

16 →

19 →

Section 5


Write a number statement for the picture.



$\square + \square = \square$

Section 7

Amir has 9 toy cars. He loses 1 car.
How many cars does he have left?



Section 3

Write the numbers in the box.

twelve

eight

seventeen


Section 8

What's next? Write 3 more numbers in this sequence.



Section 1

How many carrots are here?



Section 4

$10-1=$

$9-1=$

$13-1=$

Section 6

Put the missing numbers on the number line.



Section 2

Write the number that is one more.

$12 \rightarrow$ $16 \rightarrow$ $19 \rightarrow$

Section 5


Write a number statement for the picture.



$2 + 4 = 6$

Section 7

Amir has 9 toy cars. He loses 1 car.
How many cars does he have left?



8

Section 3

Write the numbers in the box.

twelve eight seventeen

Section 8

What's next? Write 3 more numbers in this sequence.

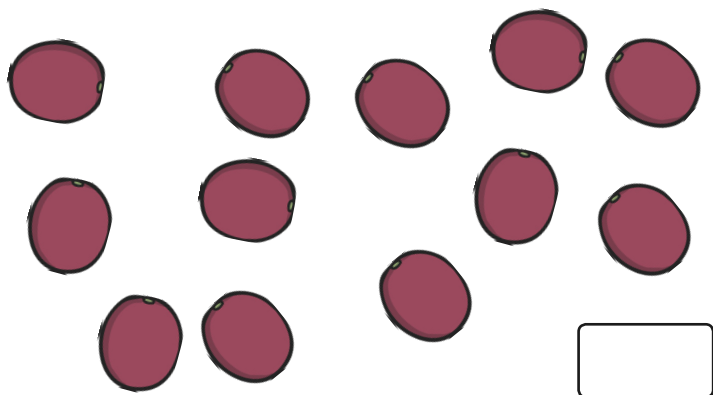


Year 1 Maths Activity Mat: Autumn 1

1

Section 1

How many grapes are here?



Section 4

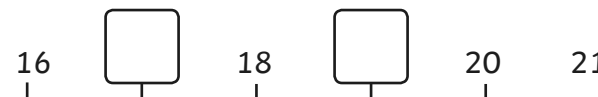
$19 - 1 =$

$17 - 1 =$

$15 - 1 =$

Section 6

Put the missing numbers on the number line.



Section 2

Write the number that is one more.

$23 \rightarrow$ $28 \rightarrow$ $31 \rightarrow$

Section 5

Write a number statement for the picture.



$\square + \square = \square$

Section 7

Tia has 15 sweets. She eats 1 sweet.
How many sweets does she have left?



Section 3

Write the numbers in the box.

fifteen twenty eleven

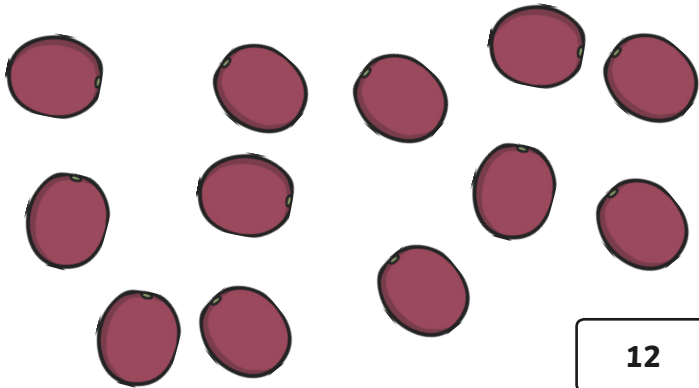
Section 8

What's next? Write 3 more numbers in this sequence.



Section 1

How many grapes are here?



Section 4

$19 - 1 = 18$

$17 - 1 = 16$

$15 - 1 = 14$

Section 6

Put the missing numbers on the number line.



Section 2

Write the number that is one more.

$23 \rightarrow 24$ $28 \rightarrow 29$ $31 \rightarrow 32$


Section 5

Write a number statement for the picture.



Section 7

Tia has 15 sweets. She eats 1 sweet.
How many sweets does she have left?



Section 3

Write the numbers in the box.

fifteen 15 twenty 20 eleven 11

Section 8

What's next? Write 3 more numbers in this sequence.

